




## Let's study.

- Point, line and plane
- Co-ordinates of a points and distance
- Betweenness
- Conditional statements
- Proof



Did you recognise the adjacent picture ? It is a picture of pyramids in Egypt, built 3000 years before Christian Era. How the people were able to build such huge structures in so old time ? It is not possible to build such huge structures without developed knowledge of Geometry and Engineering.

The word Geometry itself suggests the origin of the subject. It is generated from the Greek words Geo (Earth) and Metria (measuring). So

it can be guessed that the subject must have evolved from the need of measuring the Earth, that is land .

Geometry was developed in many nations in different periods and for different constructions. The first Greek mathematician, Thales, had gone to Egypt. It is said that he determined height of a pyramid by measuring its shadow and using properties of similar triangles.

Ancient Indians also had deep knowledge of Geometry. In vedic period, people used geometrical properties to build altars. The book shulba-sutra describes how to build different shapes by taking measurements with the help of a string. In course of time, the mathematicians Aaryabhat, Varahamihir, Bramhagupta, Bhaskaracharya and many others have given valuable contribution to the subject of Geometry.



## Let's learn.

## Basic concepts in geometry (Point, Line and Plane)

We do not define numbers. Similarly we do not define a point, line and plane also. These are some basic concepts in Geometry. Lines and planes are sets of points. Keep in mind that the word 'line' is used in the sense 'straight line'.





## Let's learn.

### Betweenness

If P, Q, R are three distinct collinear points, there are three possibilities.

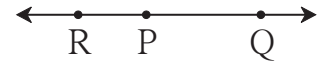


Fig. 1.2

(i) Point Q is between P and R

(ii) Point R is between P and Q

(iii) Point P is between R and Q

If  $d(P, Q) + d(Q, R) = d(P, R)$  then it is said that point Q is between P and R. The betweenness is shown as P - Q - R.

### Solved examples

**Ex (1)** On a number line, points A, B and C are such that

$$d(A, B) = 5, d(B, C) = 11 \text{ and } d(A, C) = 6.$$

Which of the points is between the other two ?

**Solution :** Which of the points A, B and C is between the other two, can be decided as follows.

$$d(B, C) = 11 \dots \text{(I)}$$

$$d(A, B) + d(A, C) = 5 + 6 = 11 \dots \text{(II)}$$

$$\therefore d(B, C) = d(A, B) + d(A, C) \dots \text{[from (I) and (II)]}$$

Point A is between point B and point C.

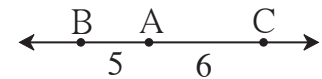


Fig. 1.3

**Ex (2)** U, V and A are three cities on a straight road. The distance between U and A is 215 km, between V and A is 140 km and between U and V is 75 km. Which of them is between the other two ?

**Solution :**  $d(U, A) = 215$ ;  $d(V, A) = 140$ ;  $d(U, V) = 75$

$$d(U, V) + d(V, A) = 75 + 140 = 215; \quad d(U, A) = 215$$

$$\therefore d(U, A) = d(U, V) + d(V, A)$$

$\therefore$  The city V is between the cities U and A.



## Practice set 1.1

1. Find the distances with the help of the number line given below.

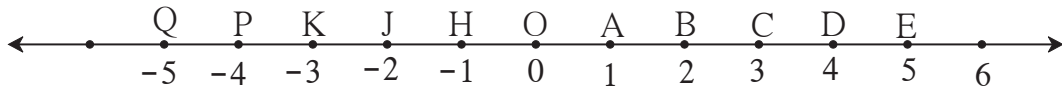


Fig. 1.5

- |               |                |                 |                  |
|---------------|----------------|-----------------|------------------|
| (i) $d(B, E)$ | (ii) $d(J, A)$ | (iii) $d(P, C)$ | (iv) $d(J, H)$   |
| (v) $d(K, O)$ | (vi) $d(O, E)$ | (vii) $d(P, J)$ | (viii) $d(Q, B)$ |
2. If the co-ordinate of A is  $x$  and that of B is  $y$ , find  $d(A, B)$ .
- |                       |                      |                       |
|-----------------------|----------------------|-----------------------|
| (i) $x = 1, y = 7$    | (ii) $x = 6, y = -2$ | (iii) $x = -3, y = 7$ |
| (iv) $x = -4, y = -5$ | (v) $x = -3, y = -6$ | (vi) $x = 4, y = -8$  |
3. From the information given below, find which of the point is between the other two. If the points are not collinear, state so.
- |                       |                 |               |
|-----------------------|-----------------|---------------|
| (i) $d(P, R) = 7,$    | $d(P, Q) = 10,$ | $d(Q, R) = 3$ |
| (ii) $d(R, S) = 8,$   | $d(S, T) = 6,$  | $d(R, T) = 4$ |
| (iii) $d(A, B) = 16,$ | $d(C, A) = 9,$  | $d(B, C) = 7$ |
| (iv) $d(L, M) = 11,$  | $d(M, N) = 12,$ | $d(N, L) = 8$ |
| (v) $d(X, Y) = 15,$   | $d(Y, Z) = 7,$  | $d(X, Z) = 8$ |
| (vi) $d(D, E) = 5,$   | $d(E, F) = 8,$  | $d(D, F) = 6$ |
4. On a number line, points A, B and C are such that  $d(A, C) = 10, d(C, B) = 8$ . Find  $d(A, B)$  considering all possibilities.
5. Points X, Y, Z are collinear such that  $d(X, Y) = 17, d(Y, Z) = 8$ , find  $d(X, Z)$ .
6. Sketch proper figure and write the answers of the following questions.
- |   |                     |                  |
|---|---------------------|------------------|
| (i) If A - B - C and $l(AC) = 11,$          | $l(BC) = 6.5,$      | then $l(AB) = ?$ |
| (ii) If R - S - T and $l(ST) = 3.7,$        | $l(RS) = 2.5,$      | then $l(RT) = ?$ |
| (iii) If X - Y - Z and $l(XZ) = 3\sqrt{7},$ | $l(XY) = \sqrt{7},$ | then $l(YZ) = ?$ |
7. Which figure is formed by three non-collinear points ?



## Let's learn.

In the book, Mathematics - Part I for std IX, we have learnt union and intersection of sets in the topic on sets. Now, let us describe a segment, a ray and a line as sets of points.

### (1) Line segment :

The union set of point A, point B and points between A and B is called segment AB. Segment AB is written as seg AB in brief. Seg AB means seg BA.

Point A and point B are called the end points of seg AB.

The distance between the end points of a segment is called the length of the segment. That is  $l(AB) = d(A,B)$   
 $l(AB) = 5$  is also written as  $AB = 5$ .




Fig. 1.6

### (2) Ray AB :

Suppose, A and B are two distinct points. The union set of all points on seg AB and the points P such that A - B - P, is called ray AB.

Here point A is called the starting point of ray AB.

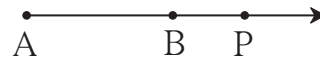


Fig. 1.7

### (3) Line AB :

The union set of points on ray AB and opposite ray of ray AB is called line AB.

The set of points of seg AB is a subset of points of line AB.

### (4) Congruent segments :

If the length of two segments is equal then the two segments are congruent.

If  $l(AB) = l(CD)$  then  $\text{seg } AB \cong \text{seg } CD$

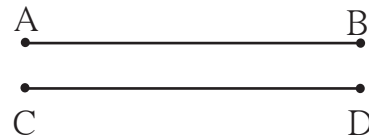


Fig. 1.8

### (5) Properties of congruent segments :

(i) Reflexivity :  $\text{seg } AB \cong \text{seg } AB$

(ii) Symmetry : If  $\text{seg } AB \cong \text{seg } CD$  then  $\text{seg } CD \cong \text{seg } AB$

(iii) Transitivity : If  $\text{seg } AB \cong \text{seg } CD$  and  $\text{seg } CD \cong \text{seg } EF$  then  $\text{seg } AB \cong \text{seg } EF$

### (6) Midpoint of a segment :

If A-M-B and  $\text{seg } AM \cong \text{seg } MB$ , then M is called the midpoint of seg AB.

Every segment has one and only one midpoint.

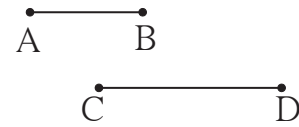


Fig. 1.9

**(7) Comparison of segments :**

If length of segment AB is less than the length of segment CD, it is written as  $\text{seg AB} < \text{seg CD}$  or  $\text{seg CD} > \text{seg AB}$ .

The comparison of segments depends upon their lengths.

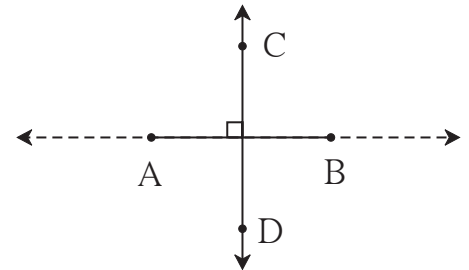


**Fig. 1.10**

**(8) Perpendicularity of segments or rays :**

If the lines containing two segments, two rays or a ray and a segment are perpendicular to each other then the two segments, two rays or the segment and the ray are said to be perpendicular to each other.

In the figure 1.11,  $\text{seg AB} \perp \text{line CD}$ ,  
 $\text{seg AB} \perp \text{ray CD}$ .



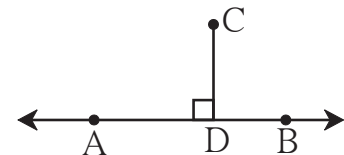
**Fig. 1.11**

**(9) Distance of a point from a line :**

If  $\text{seg CD} \perp \text{line AB}$  and the point D lies on line AB then the length of seg CD is called the distance of point C from line AB.

The point D is called the foot of the perpendicular.

If  $l(\text{CD}) = a$ , then the point C is at a distance of 'a' from the line AB.



**Fig. 1.12**

**Practice set 1.2**

1. The following table shows points on a number line and their co-ordinates. Decide whether the pair of segments given below the table are congruent or not.

Point	A	B	C	D	E
Co-ordinate	-3	5	2	-7	9

(i) seg DE and seg AB (ii) seg BC and seg AD (iii) seg BE and seg AD

2. Point M is the midpoint of seg AB. If  $AB = 8$  then find the length of AM.

3. Point P is the midpoint of seg CD. If  $CP = 2.5$ , find  $l(\text{CD})$ .

4. If  $AB = 5$  cm,  $BP = 2$  cm and  $AP = 3.4$  cm, compare the segments.

5. Write the answers to the following questions with reference to figure 1.13.

- (i) Write the name of the opposite ray of ray RP
- (ii) Write the intersection set of ray PQ and ray RP.
- (iii) Write the union set of seg PQ and seg QR.
- (iv) State the rays of which seg QR is a subset.
- (v) Write the pair of opposite rays with common end point R.
- (vi) Write any two rays with common end point S.
- (vii) Write the intersection set of ray SP and ray ST.



Fig. 1.13

6. Answer the questions with the help of figure 1.14.

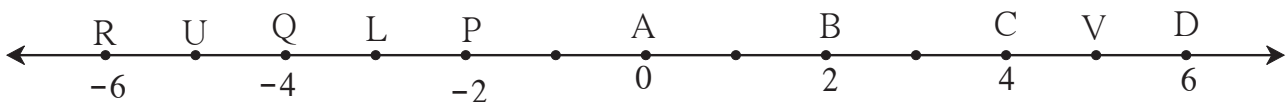


Fig. 1.14

- (i) State the points which are equidistant from point B.
- (ii) Write a pair of points equidistant from point Q.
- (iii) Find  $d(U,V)$ ,  $d(P,C)$ ,  $d(V,B)$ ,  $d(U, L)$ .



Let's learn.

### Conditional statements and converse

The statements which can be written in the 'If-then' form are called conditional statements. The part of the statement following 'If' is called the antecedent, and the part following 'then' is called the consequent.

For example, consider the statement : The diagonals of a rhombus are perpendicular bisectors of each other.

The statement can be written in the conditional form as, 'If the given quadrilateral is a rhombus then its diagonals are perpendicular bisectors of each other.'

If the antecedent and consequent in a given conditional statement are interchanged, the resulting statement is called the **converse** of the given statement.

If a conditional statement is true, its converse is not necessarily true. Study the following examples.

**Conditional statement :** If a quadrilateral is a rhombus then its diagonals are perpendicular bisectors of each other.





### Practice set 1.3

- Write the following statements in 'if-then' form.
  - The opposite angles of a parallelogram are congruent.
  - The diagonals of a rectangle are congruent.
  - In an isosceles triangle, the segment joining the vertex and the mid point of the base is perpendicular to the base.
- Write converses of the following statements.
  - The alternate angles formed by two parallel lines and their transversal are congruent.
  - If a pair of the interior angles made by a transversal of two lines are supplementary then the lines are parallel.
  - The diagonals of a rectangle are congruent.

### Problem set 1

- Select the correct alternative from the answers of the questions given below.
  - How many mid points does a segment have ?  
(A) only one      (B) two      (C) three      (D) many
  - How many points are there in the intersection of two distinct lines ?  
(A) infinite      (B) two      (C) one      (D) not a single
  - How many lines are determined by three distinct points ?  
(A) two      (B) three      (C) one or three      (D) six
  - Find  $d(A, B)$ , if co-ordinates of A and B are  $-2$  and  $5$  respectively.  
(A)  $-2$       (B)  $5$       (C)  $7$       (D)  $3$
  - If  $P - Q - R$  and  $d(P, Q) = 2$ ,  $d(P, R) = 10$ , then find  $d(Q, R)$ .  
(A)  $12$       (B)  $8$       (C)  $\sqrt{96}$       (D)  $20$
- On a number line, co-ordinates of P, Q, R are  $3$ ,  $-5$  and  $6$  respectively. State with reason whether the following statements are true or false.
  - $d(P, Q) + d(Q, R) = d(P, R)$
  - $d(P, R) + d(R, Q) = d(P, Q)$
  - $d(R, P) + d(P, Q) = d(R, Q)$
  - $d(P, Q) - d(P, R) = d(Q, R)$
- Co-ordinates of some pairs of points are given below. Hence find the distance between each pair.
  - $3, 6$
  - $-9, -1$
  - $-4, 5$
  - $0, -2$
  - $x + 3, x - 3$
  - $-25, -47$
  - $80, -85$

4. Co-ordinate of point P on a number line is  $-7$ . Find the co-ordinates of points on the number line which are at a distance of 8 units from point P.
5. Answer the following questions.
  - (i) If  $A - B - C$  and  $d(A,C) = 17$ ,  $d(B,C) = 6.5$  then  $d(A,B) = ?$
  - (ii) If  $P - Q - R$  and  $d(P,Q) = 3.4$ ,  $d(Q,R) = 5.7$  then  $d(P,R) = ?$
6. Co-ordinate of point A on a number line is 1. What are the co-ordinates of points on the number line which are at a distance of 7 units from A ?
7. Write the following statements in conditional form.
  - (i) Every rhombus is a square.
  - (ii) Angles in a linear pair are supplementary.
  - (iii) A triangle is a figure formed by three segments.
  - (iv) A number having only two divisors is called a prime number.
8. Write the converse of each of the following statements.
  - (i) If the sum of measures of angles in a figure is  $180^\circ$ , then the figure is a triangle.
  - (ii) If the sum of measures of two angles is  $90^\circ$  then they are complement of each other.
  - (iii) If the corresponding angles formed by a transversal of two lines are congruent then the two lines are parallel.
  - (iv) If the sum of the digits of a number is divisible by 3 then the number is divisible by 3.
9. Write the antecedent (given part) and the consequent (part to be proved) in the following statements.
  - (i) If all sides of a triangle are congruent then its all angles are congruent.
  - (ii) The diagonals of a parallelogram bisect each other.
- 10\*. Draw a labelled figure showing information in each of the following statements and write the antecedent and the consequent.
  - (i) Two equilateral triangles are similar.
  - (ii) If angles in a linear pair are congruent then each of them is a right angle.
  - (iii) If the altitudes drawn on two sides of a triangle are congruent then those two sides are congruent.

