

# Let us 'Add'

This is my block

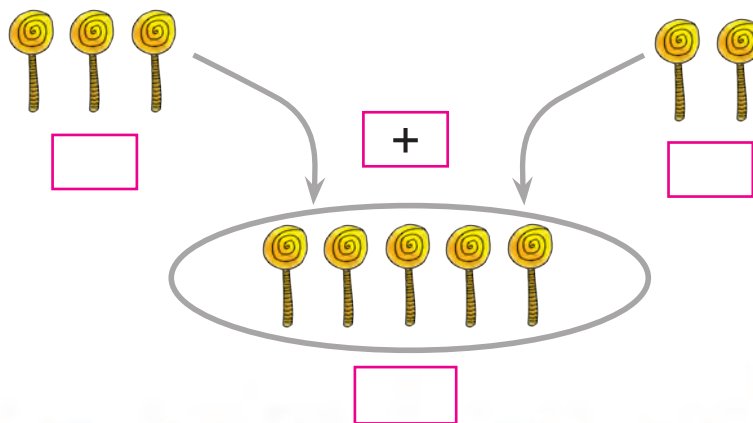
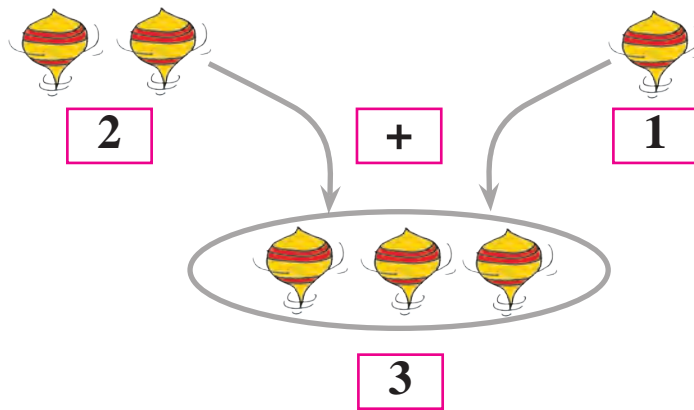
This is mine

Rama has 1 block.

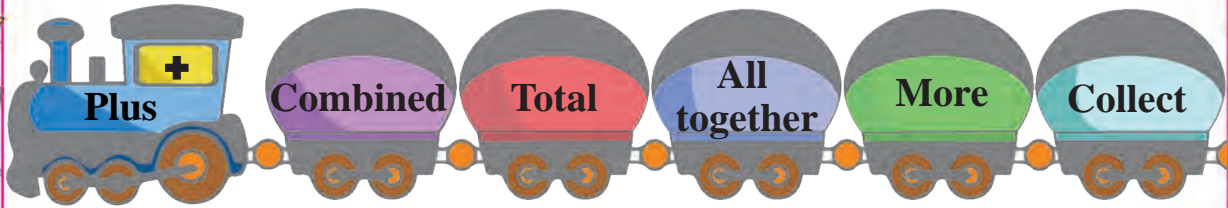
Yash has 1 block.

They together have **2** blocks.

To add two numbers, + sign is used. It is read as 'plus'. The sign = shows equality. It is read as 'is equal to'.



Observe the addition train.





Are there any more words to show addition? For example :  
to gather, .....

Draw beads to match the given numbers and add them.

+   
 3 +  2

Count the pictures and add.

 +   
 3 +  5 =   
Three Plus Five Equal to  Eight




 +   
 4 +  3 =




 +   
 5 +  4 =




 +   
 4 +  4 =

## Addition of Zero

Add, write the numbers and draw proper pictures.

 $2 + 0 = 2$ 

 $3 + 0 = \square$ 

 $1 + 0 = \square$ 

 $5 + \square = \square$ 

Let's practise addition.

$4 + 1 = \square$

$3 + 5 = \square$

$$\begin{array}{r} 6 \\ + 2 \\ \hline \end{array}$$

$$\begin{array}{r} 7 \\ + 0 \\ \hline \end{array}$$

$5 + \square = 7$

$8 + \square = 9$

$2 + \square = 5$

$\square + \square = 8$



Read and solve.

- Salil had 6 chalks. Hameed gave him 3 more chalks. How many chalks does Salil have in all ?

6	Salil's chalks
+ 3	Hameed gave
9	Total chalks

- Ketan has 4 almonds and Neha has 4 almonds. How many almonds do they together have ?

4	Ketan's almonds
+ 4	Neha's almonds
	Total almonds

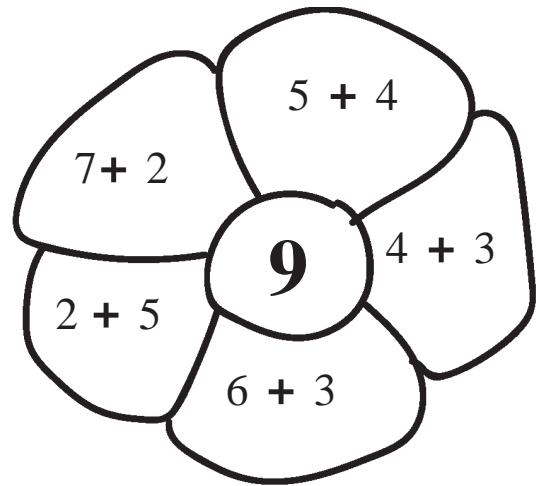
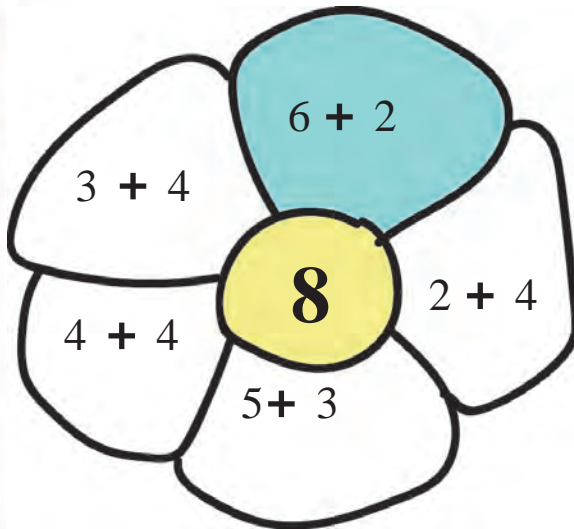
- Joseph has 7 flowers and Angel has 2 flowers. Find the total number of flowers with them.

	Joseph's flowers
	Angel's flowers
	Total flowers

- Jiya has 5 beads and Parmeet has 3 beads. How many beads do they have together ?

	Jiya's beads
	Parmeet's beads
	Total beads

Colour the petals whose answer is equal to number in the circle.



Add the numbers given on a butterfly and join it with the correct flower.

