

# Coins and currency notes



1 rupee



2 rupees



5 rupees



10 rupees



One rupee    Two rupees    Five rupees    Ten rupees    Twenty rupees

How can you give exact amount ?

2 rupees



4 rupees



5 rupees



10 rupees



20 rupees






Think

Can you make up the same amounts using other combinations of currency notes and coins ?



SYE8PM

Which notes or coins will you pay to buy given articles ?

Article	Price	Coins/Notes
	3 rupees	
	12 rupees	
	18 rupees	

Find the price of the article by counting coins.

Article	Coins	Price
		
		
		

Read and write the answers.

- 1) A bunch of *methi* costs 10 rupees. How many five-rupee coins are needed to pay for it ?
- 2) A pencil was bought by giving 3 coins of two-rupee, so what was the price of the pencil ?
- 3) The price of a candle is rupees 10 and price of a match box is rupee 1. Find the total price of one candle and one match box.
- 4) Ajahar bought a note book by giving one currency note of 10 rupees and one coin of rupees 10, what is the cost of the note book ?